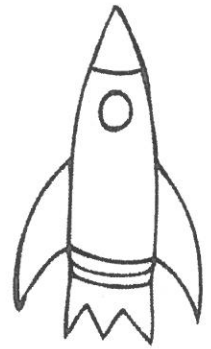




**INDIAN SCHOOL MUSCAT
PRIMARY SECTION**

| | | |
|---------------------------------------|--------------------|------------------------------|
| Subject: EVS | Semester II | Name: |
| Topic: The Sun, Moon and Stars | | Std. I Sec : |
| Practice Work sheet No. 8 | | Date : |
| Resource Person: Leena Sudesan | | Teacher's Signature : |

I. Name the pictures given below.

Sun Moon Star Rocket



II. Tick the correct statements.

1. The Sun gives us light.
2. Stars are big balls of fire.
3. The sun shines during the night.
4. Some people have been to the Moon in rockets.
5. Sun is the star closest to the Earth.

| |
|--------------------------|
| <input type="checkbox"/> |
| <input type="checkbox"/> |
| <input type="checkbox"/> |
| <input type="checkbox"/> |
| <input type="checkbox"/> |

III. Draw the different phases of moon.

| | | | |
|--|--|--|--|
| | | | |
|--|--|--|--|